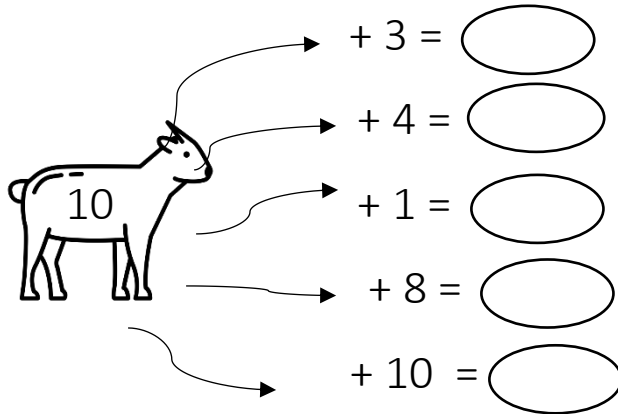
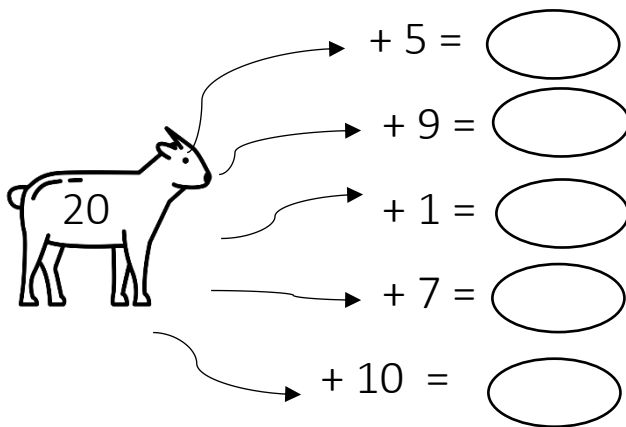


Nome: \_\_\_\_\_ Data: \_\_\_\_\_


1. Calcula e completa:

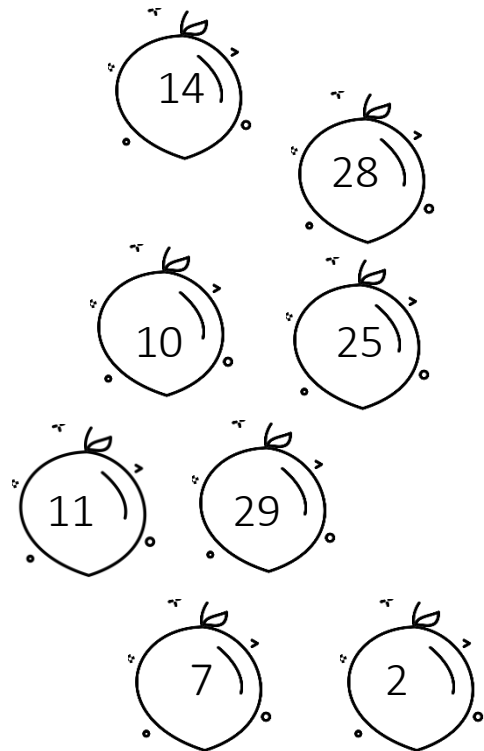


$+ 3 = \text{○}$   
 $+ 4 = \text{○}$   
 $+ 1 = \text{○}$   
 $+ 8 = \text{○}$   
 $+ 10 = \text{○}$




$+ 5 = \text{○}$   
 $+ 9 = \text{○}$   
 $+ 1 = \text{○}$   
 $+ 7 = \text{○}$   
 $+ 10 = \text{○}$

 Pinta os números pares.



14, 28, 10, 25, 11, 29, 7, 2

2. Pinta metade dos elementos e completa:



$\frac{1}{2} \times 8 = \text{_____}$ . Então, metade de 8 é \_\_\_\_\_.

