



Nome: _____ Data: _____

1. Calcula e completa:




$+ 3 = \text{○}$
 $+ 4 = \text{○}$
 $+ 1 = \text{○}$
 $+ 8 = \text{○}$
 $+ 10 = \text{○}$




$+ 5 = \text{○}$
 $+ 9 = \text{○}$
 $+ 1 = \text{○}$
 $+ 7 = \text{○}$
 $+ 10 = \text{○}$

 Pinta os números ímpares.



44, 35, 50, 33, 42, 29, 6, 25

2. Pinta metade dos elementos e completa:



$\frac{1}{2} \times 14 = \underline{\quad}$. Então, metade de 4 é $\underline{\quad}$.

