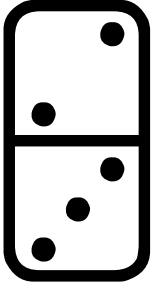
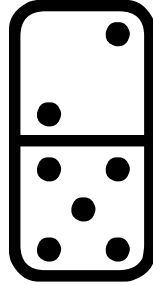


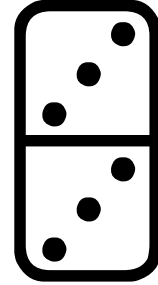
Faz as contas com ajuda dos dominós.



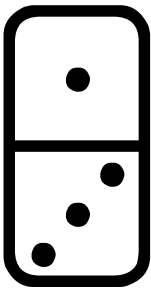
$$2 + 3 = \_$$



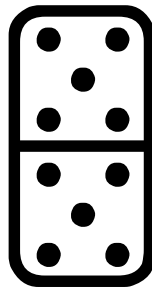
$$2 + \_ = \_$$



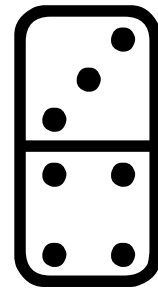
$$\_ + 6 = \_$$



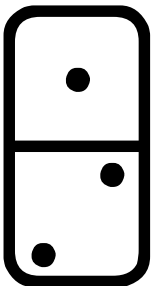
$$\_ + 3 = \_$$



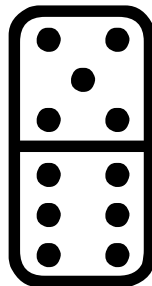
$$5 + \_ = \_$$



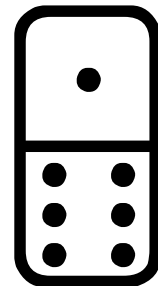
$$\_ + 4 = \_$$



$$\_ + 2 = \_$$



$$\_ + \_ = \_$$



$$\_ + \_ = \_$$

