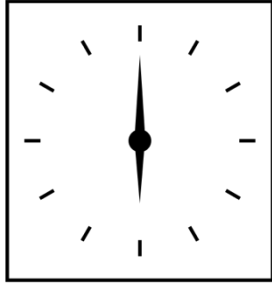




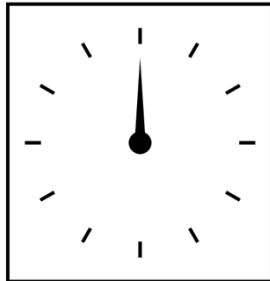
Que horas são?

- Assinala a resposta certa



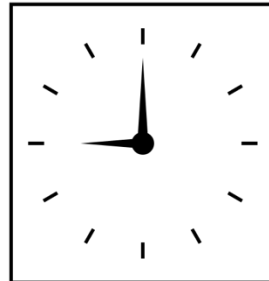
12h 30m ___

6h ___




12h ___

9h ___



3h 15m ___

9h ___



11h ___

8h15m ___

- Escreve as horas certas.

Manhã







Tarde







