



O MONSTRO DAS BOLACHAS



Calcula. Pinta a bolacha cujos resultados forem pares.



$$\boxed{13} - \boxed{3} = \boxed{}$$



$$\boxed{12} - \boxed{6} = \boxed{}$$




$$\boxed{9} - \boxed{4} = \boxed{}$$



$$\boxed{15} - \boxed{7} = \boxed{}$$



$$\boxed{22} - \boxed{2} = \boxed{}$$



$$\boxed{25} - \boxed{4} = \boxed{}$$



$$\boxed{26} - \boxed{5} = \boxed{}$$



$$\boxed{28} - \boxed{6} = \boxed{}$$

