



O MONSTRO DAS BOLACHAS



Calcula. Pinta a bolacha cujos resultados forem pares.



$$\boxed{10} - \boxed{3} = \boxed{}$$




$$\boxed{10} - \boxed{6} = \boxed{}$$



$$\boxed{10} - \boxed{4} = \boxed{}$$



$$\boxed{10} - \boxed{7} = \boxed{}$$



$$\boxed{11} - \boxed{2} = \boxed{}$$



$$\boxed{15} - \boxed{3} = \boxed{}$$



$$\boxed{16} - \boxed{3} = \boxed{}$$



$$\boxed{18} - \boxed{4} = \boxed{}$$

