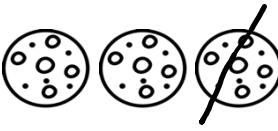





Subtrações

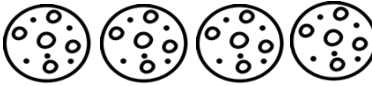
Conta as bolachas e subtrai

$$\boxed{3} - \boxed{1} = \boxed{}$$


$$\boxed{6} - \boxed{3} = \boxed{}$$


$$\boxed{10} - \boxed{4} = \boxed{}$$


$$\boxed{9} - \boxed{2} = \boxed{}$$


$$\boxed{4} - \boxed{2} = \boxed{}$$


$$\boxed{8} - \boxed{5} = \boxed{}$$
